



EXAMINATIONS COUNCIL OF ESWATINI
Junior Certificate Examination

CANDIDATE
NAME

--

CENTRE
NUMBER

--	--	--	--

CANDIDATE
NUMBER

--	--	--	--

GEOGRAPHY

Paper 1

527/01

October/November 2024

1 hour 45 minutes

Candidates answer on the question paper.
No additional materials are required.

READ THESE INSTRUCTIONS FIRST

Write your name, centre number and candidate number in the spaces provided.

Write in **dark blue** or **black pen**.

You may use a soft pencil for any diagrams, graphs, tables or rough working.

Do not use staples, paper clips, highlighters, glue or correction fluid.

Answer **three** questions. Choose **one** question from each section.

Sketch maps and diagrams should be drawn wherever they serve to illustrate an answer.

The number of marks is given in brackets [] at the end of each question or part question.

For Examiner's Use	
SECTION A	
Question 1	
Question 2	
SECTION B	
Question 3	
Question 4	
SECTION C	
Question 5	
Question 6	
TOTAL	

This document consists of **13** printed pages and **3** blank pages.

SECTION A – ESWATINI

Answer **one** question from this section.

- 1 (a) Fig. 1 shows Eswatini, a landlocked country.

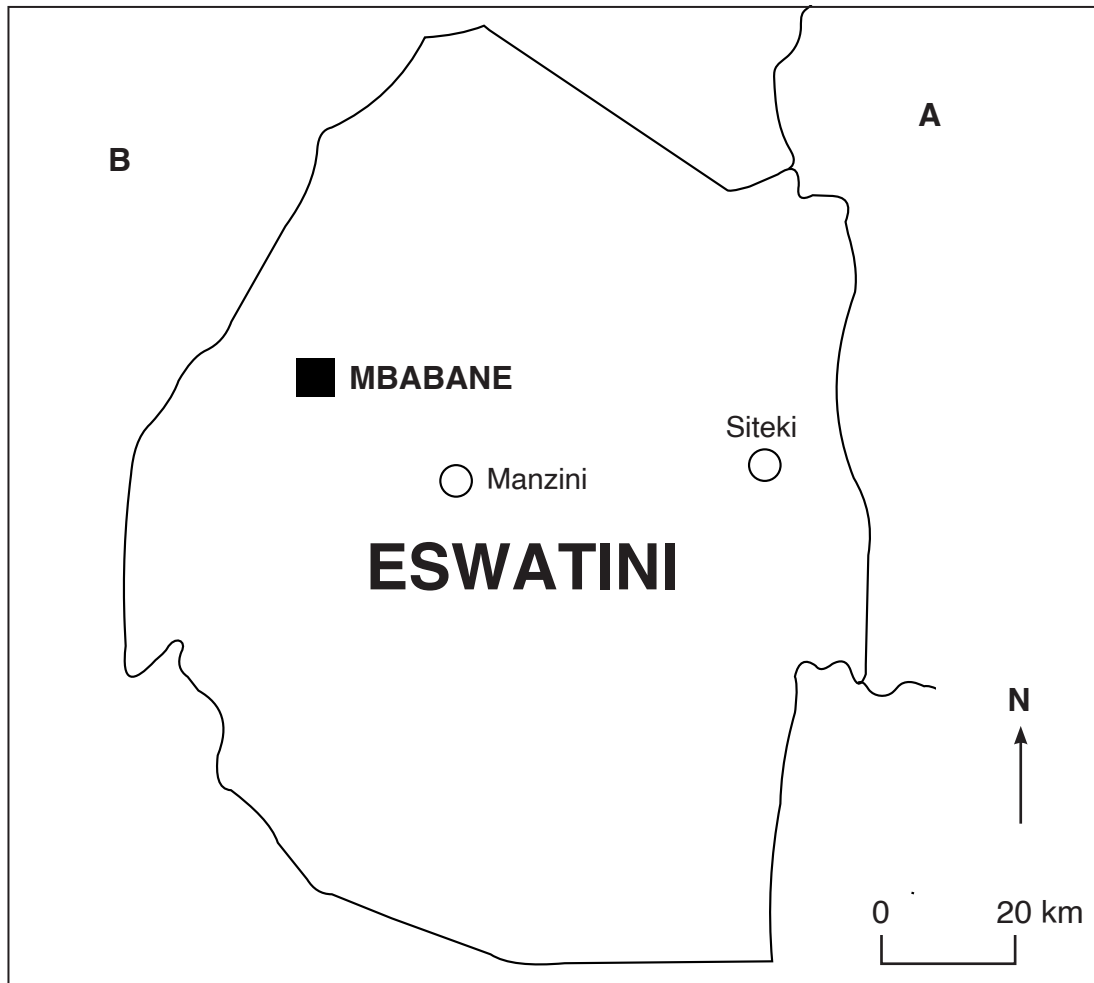


Fig. 1

- (i) What is a landlocked country?

..... [1]

- (ii) Using Fig. 1, name the countries labelled as **A** and **B**.

A.....

B..... [2]

- (iii) Explain any **two** economic advantages enjoyed by Eswatini for being landlocked.

1.....

.....

.....

2.....

.....

..... [4]

(b) Pineapples are one of the crops grown in Eswatini.

(i) Name any **three** physical conditions favouring pineapple growing in Eswatini.

1.....

2.....

3..... [3]

(ii) Name **two** countries that buy pineapples from Eswatini.

1.....

2..... [2]

(iii) State any **two** marketing problems in the pineapple growing industry.

1.....

2..... [2]

(c) Suggest **three** advantages of using hydroelectric power in Eswatini.

1.....

.....

.....

.....

2.....

.....

.....

.....

3.....

.....

.....

..... [6]

[Total: 20 marks]

2 (a) Soil erosion is a very serious problem which needs to be addressed in Eswatini.

(i) Name any **one** natural cause of soil erosion.

..... [1]

(ii) State any **two** causes of soil erosion by humans.

1.....

2..... [2]

(iii) Explain any **two** effects of soil erosion on the environment.

1.....

.....

.....

2.....

.....

..... [4]

(b) Study Fig. 2, which shows the location of industrial areas in Eswatini.

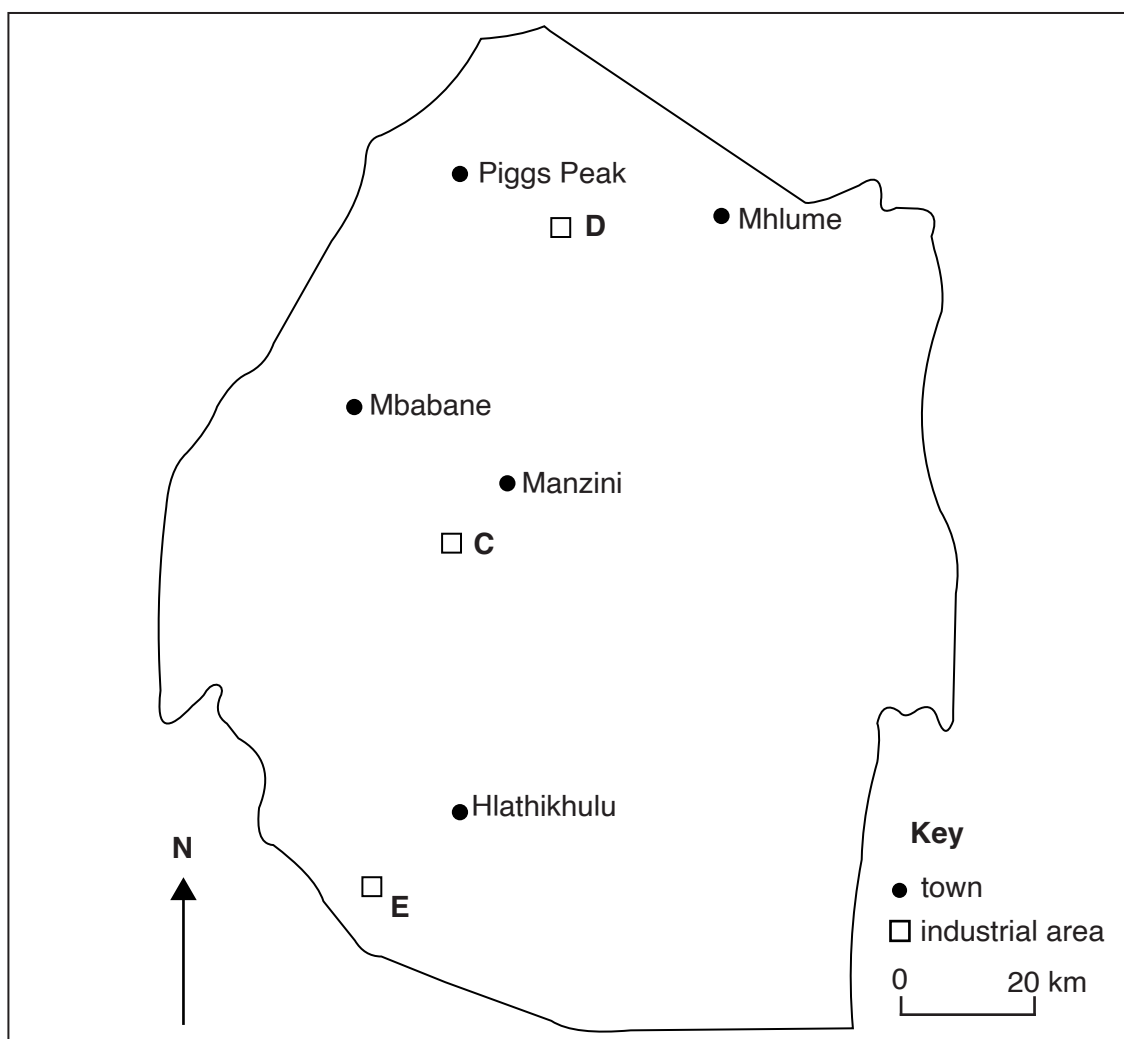


Fig. 2

- (i) Name the **three** industrial areas marked **C**, **D** and **E** in Fig. 2.

C.....

D.....

E..... [3]

- (ii) List any **two** factors influencing the location of industrial areas.

1.....

2..... [2]

- (iii) State **two** factors hindering industrial development in Eswatini.

1.....

2..... [2]

- (c) Suggest **three** soil conservation measures in Eswatini.

1.....

.....

.....

.....

2.....

.....

.....

.....

3

.....

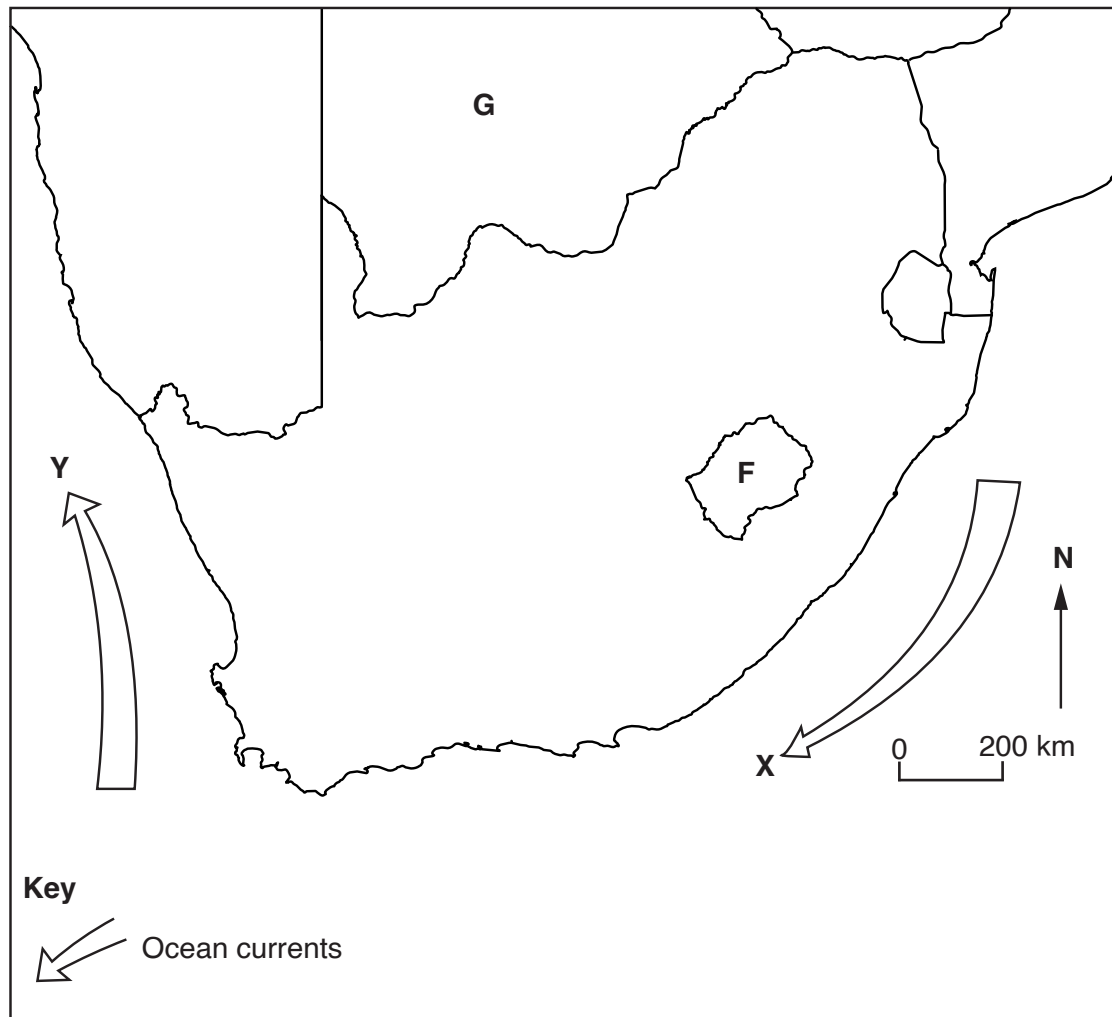
.....

..... [6]

[Total: 20 marks]

SECTION B – SADCAnswer **one** question from this section.

- 3 (a)** Study Fig. 3, which shows the Republic of South Africa.

**Fig. 3**

- (i) Name the ocean current marked as **X**.
 [1]
- (ii) Identify the **two** countries marked in Fig. 3 as **F** and **G**.
F.....
G..... [2]

(iii) Explain any **two** factors favouring coal mining in the Republic of South Africa.

- 1.....
.....
2.....
..... [4]

(b) Wheat is an important crop grown in the Republic of South Africa.

(i) Name any **three** provinces where wheat is grown in South Africa.

- 1.....
2.....
3..... [3]

(ii) State any **two** types of wheat produced in South Africa.

- 1.....
2..... [2]

(iii) List any **two** physical factors which favour wheat growing in South Africa.

- 1.....
2..... [2]

(c) Suggest **three** problems of mining to the environment.

- 1.....
.....
.....
.....
2.....
.....
.....
.....
3.....
.....
.....
..... [6]

[Total: 20 marks]

- 4 (a) Study Fig. 4, which shows Namibia with some of her neighbouring countries and ocean.

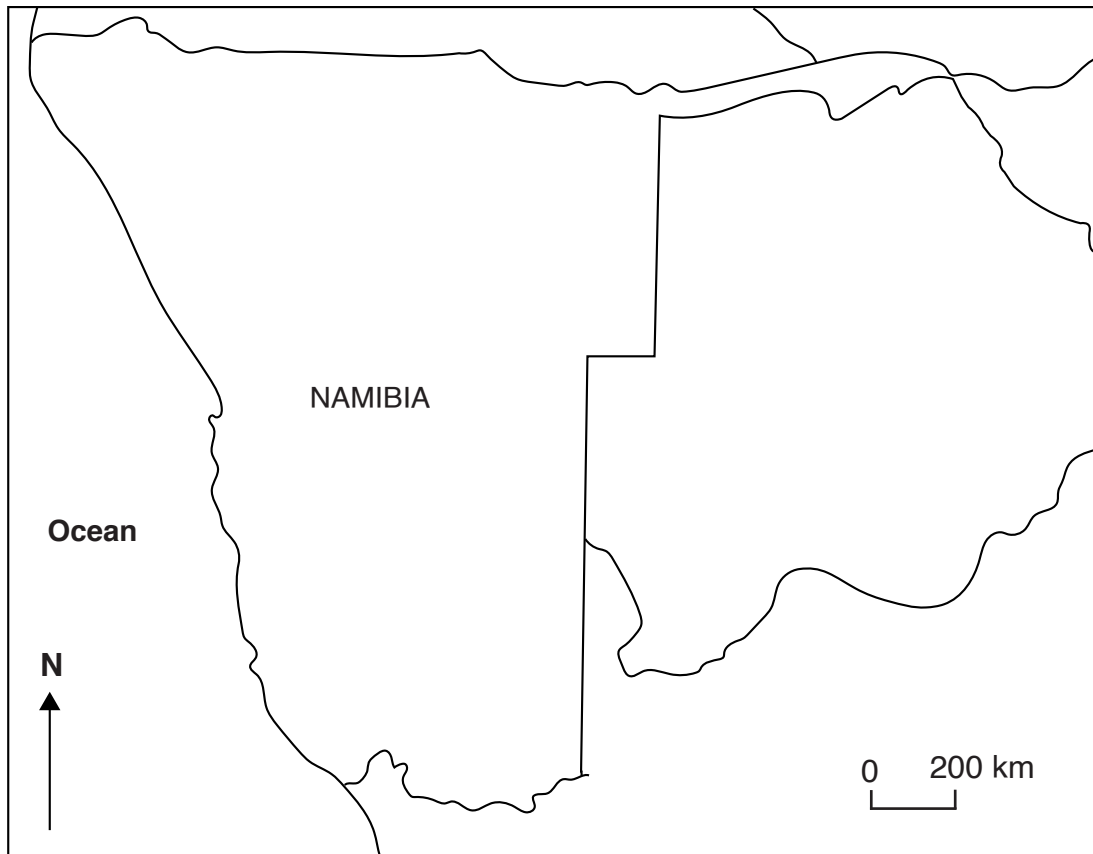


Fig. 4

- (i) Name the ocean found on the western side of Namibia.
 [1]
- (ii) State any **two** countries that share borders with Namibia.
 1.....
 2..... [2]
- (iii) Explain any **two** ways by which water is harnessed in Namibia.
 1.....

 2.....

 [4]

(b) (i) Name any **three** tourist attraction areas found in Botswana.

1.....

2.....

3..... [3]

(ii) State any **two** strategies used by the government of Botswana to promote tourism.

1.....

2.....

3..... [2]

(iii) List any **two** problems facing tourism in Botswana.

1.....

2..... [2]

(c) Suggest **three** effects of the mountainous relief of Lesotho on transport.

1.....

.....

.....

.....

2.....

.....

.....

.....

3.....

.....

.....

..... [6]

[Total: 20 marks]

SECTION C – COUNTRIES OUTSIDE AFRICA

Answer **one** question from this section.

- 5 (a) Study the map of the Netherlands shown as Fig. 5 and answer the questions that follow.

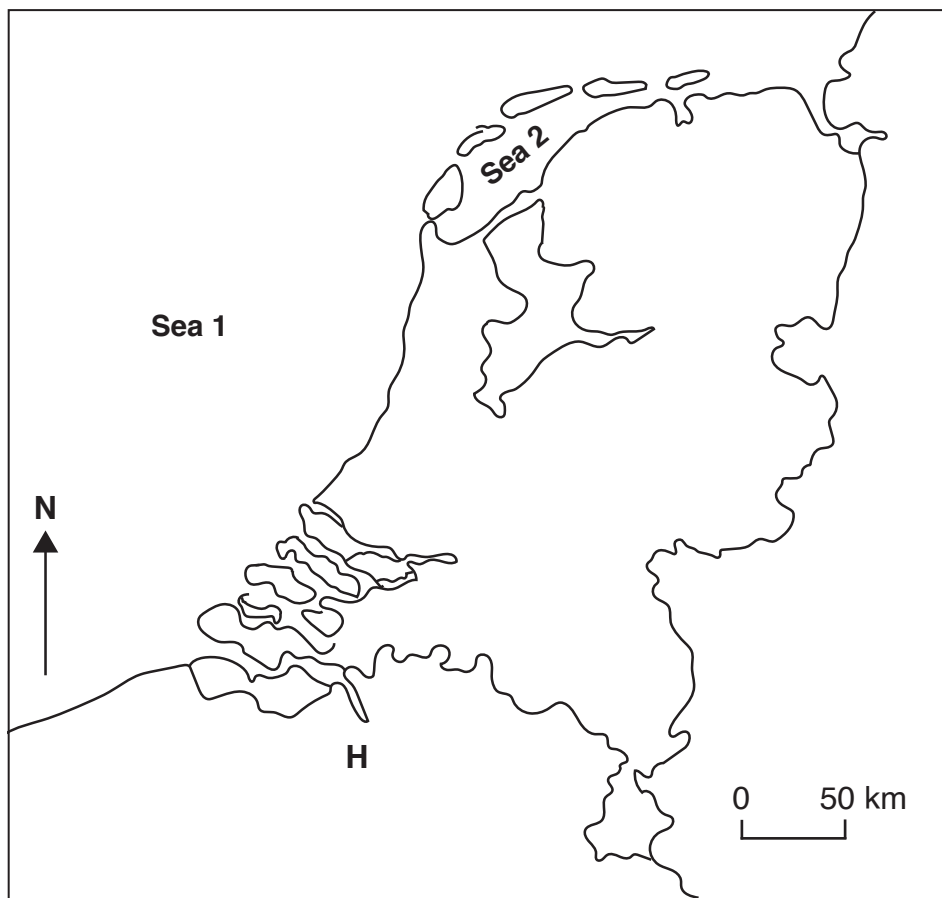


Fig. 5

- (i) Name the neighbouring country shown as **H**.

..... [1]

- (ii) Identify the **two** seas marked as **Sea 1** and **Sea 2** on Fig. 5.

Sea 1

Sea 2 [2]

- (iii) Explain any **two** steps of land reclamation using the landfill method in the Netherlands.

1.....

.....

.....

2.....

.....

..... [4]

(b) (i) State any **three** features of agriculture in Japan.

1.....

2.....

3..... [3]

(ii) Name any **two** crops grown in Japan.

1.....

2..... [2]

(iii) State **two** ways used by the Japanese farmers to solve the problem of land shortage.

1.....

2..... [2]

(c) Suggest **three** advantages of dairy cows to the environment.

1.....

.....

.....

.....

2.....

.....

.....

.....

3.....

.....

.....

..... [6]

[Total: 20 marks]

6 (a) Study Fig. 6, which shows the map of India.

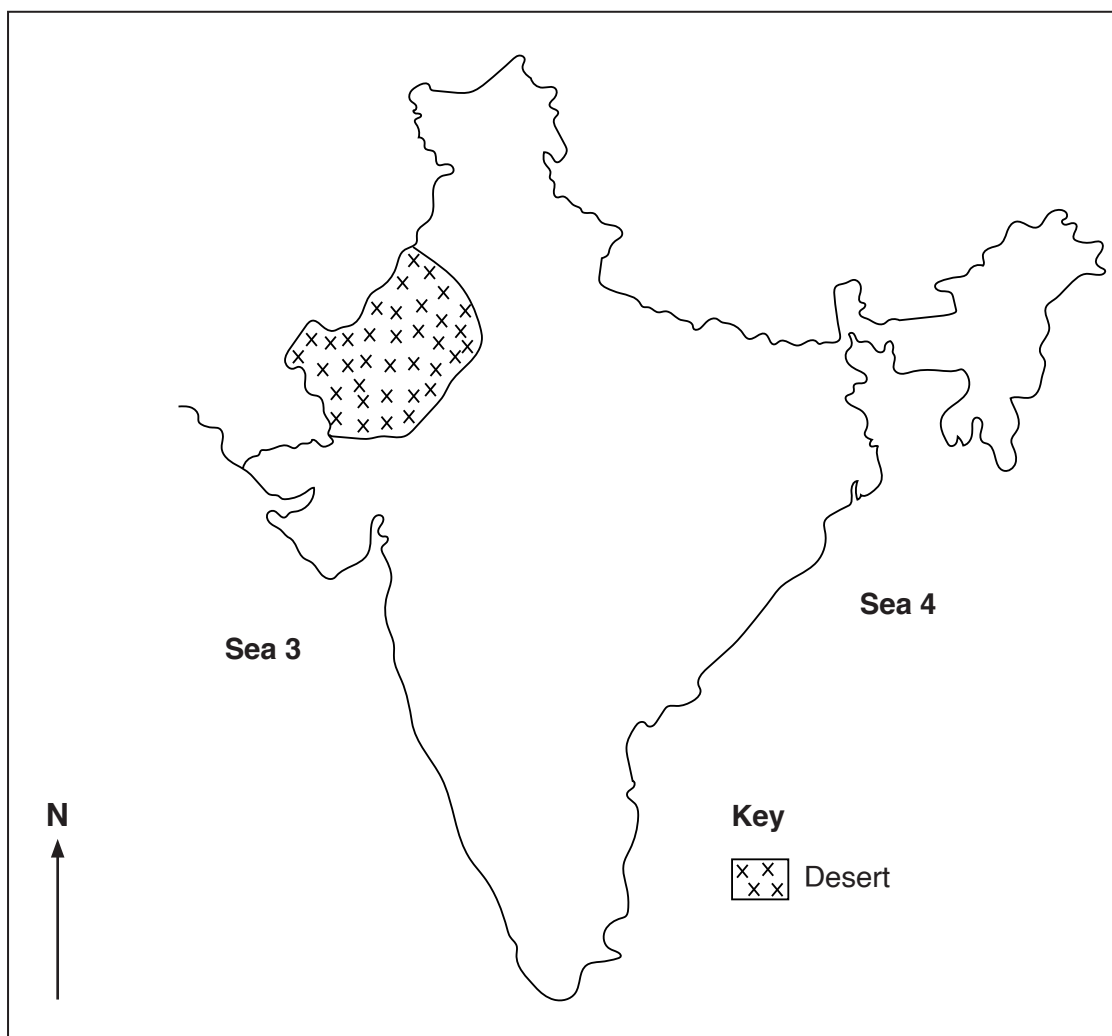


Fig. 6

(i) Name the shaded desert found in the North-Western part of India.

..... [1]

(ii) Identify the **two** seas labelled as **Sea 3** and **Sea 4**.

Sea 3.....

Sea 4..... [2]

(iii) Explain any **two** economic factors that promote the growth of tea in India.

1.....

.....

.....

2.....

.....

..... [4]

- (b) (i) List any **three** features of the tropical rainforest region.

1.....

2.....

3..... [3]

- (ii) State any **two** solutions to the problems of exploiting the tropical rainforest in Brazil.

1.....

2..... [2]

- (ii) List **two** reasons for the decline of natural rubber production in Brazil.

1.....

2..... [2]

- (c) Suggest any **three** solutions to the problems caused by the large population in India.

1.....

.....

.....

.....

2.....

.....

.....

.....

3.....

.....

.....

..... [6]

[Total: 20 marks]

BLANK PAGE

BLANK PAGE